


PARENTS: You may read the problem to your child and demonstrate a **similar** problem, but he/she should work the problems. Please encourage independent thinking and problem solving skills.

SCORING: 20 paw points per page. Two for Full Name, Two for Teacher's Last Name, and 16 for problems. Paw values are printed before each problem. Every problem varies, so read each carefully! Worksheets are to be turned into the Cheetah Superstars Math box anytime during the week but **before 8:30 am on Friday**.

SKILLS: Fractions



Name: _____

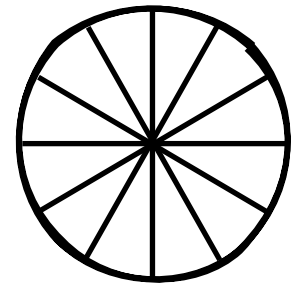


First and Last





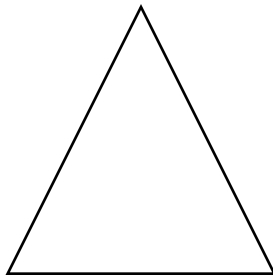

Teacher: _____




1. It is Grant's Birthday and he is having a party! There are 12 guests at Grant's party. Which cake is cut to serve each guest one slice? Color your answer.



2. Draw a line on each shape to show half.




3. Draw the missing half.

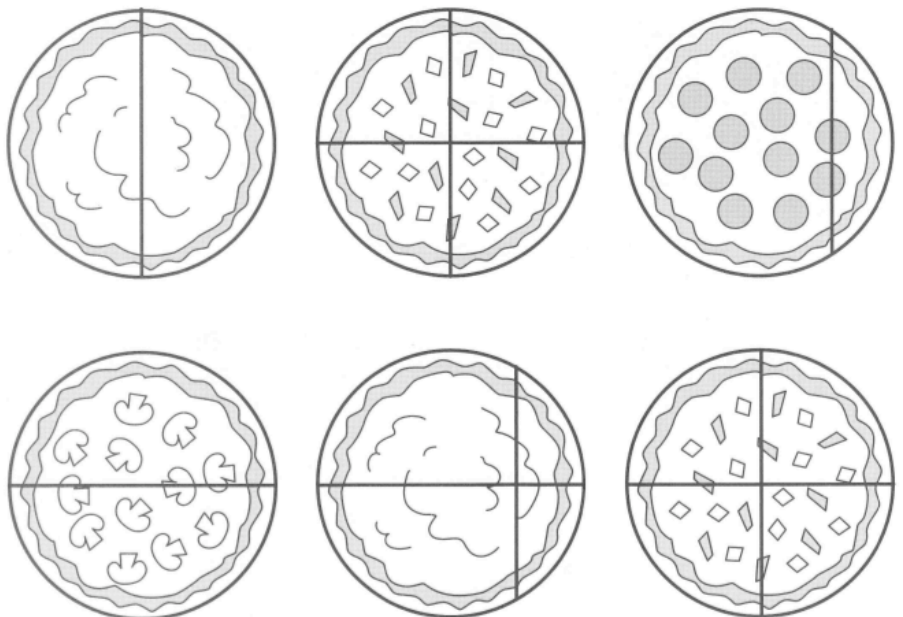




4. Color the flowers that shows four equal parts (quarters)



5. Color the pizzas that have equal parts



6. You have 4 cookies and you want to share them with your friend. How many cookies do you give your friend so that both of you have the same amount of cookies. Circle your share and your friends share.

